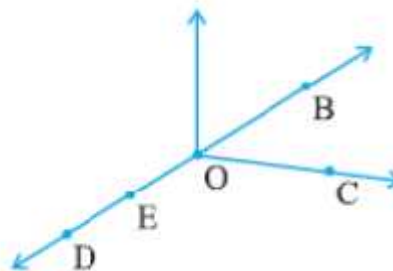


Bharti Public School  
Maths Worksheet Class VI - \_\_\_\_  
Basic Geometrical Ideas

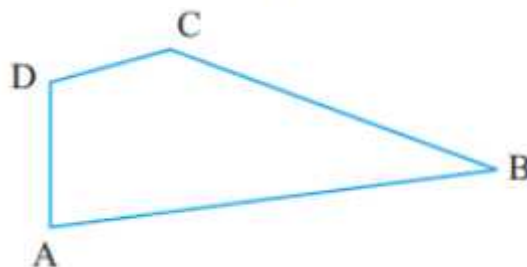
1. Use the figure to name :

- (a) Five points
- (b) A line
- (c) Four rays
- (d) Five line segments



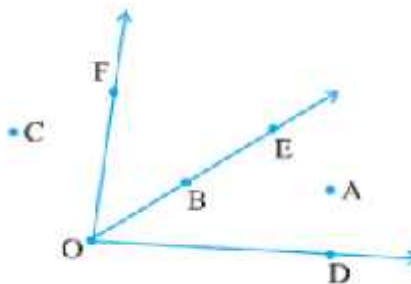
2. How many lines can pass through (a) one given point? (b) two given points?

3. Name the angles in the given figure.



4. In the given diagram, name the point(s)

- (a) In the interior of  $\angle DOE$
- (b) In the exterior of  $\angle EOF$
- (c) On  $\angle EOF$



5. From the figure, identify :

- (a) the centre of circle
- (b) three radii
- (c) a diameter
- (d) a chord
- (e) two points in the interior
- (f) a point in the exterior
- (g) a sector
- (h) a segment

